

प्र.1	अपठित गद्यांश को ध्यानपूर्वक पढ़कर नीचे दिए गए प्रश्नों के उत्तर दीजिए-
	कुछ लोग परिश्रम की अपेक्षा भाग्य को महत्व देते हैं। उनका कहना है कि जो भाग्य में होगा अवश्य मिलेगा, इसलिए दौड़-धूप करना व्यर्थ है परंतु आलसी बनकर बैठे रहना और असफलता के लिए भाग्य को कोसना किसी प्रकार भी उचित नहीं। परिश्रम के बल पर मनुष्य भाग्य की रेखाओं को बदल सकता है। परिश्रमी व्यक्ति स्वावलंबी, ईमानदार और चरित्रवान होता है। परिश्रम के द्वारा ही मनुष्य अपनी, परिवार की, जाति की तथा राष्ट्र की उन्नति में सहयोग दे सकता है। अतः परिश्रम करने की प्रवृत्ति मनुष्य को विद्यार्थी जीवन से ही ग्रहण करनी चाहिए।
I	भाग्य को महत्व देने वालों का क्या कहना है?
II	क्या करना उचित नहीं है?
III	परिश्रमी व्यक्ति कैसे होते हैं?
IV	परिश्रम के द्वारा मनुष्य किसकी उन्नति में सहयोग दे सकता है?
V	आलसी का विलोम शब्द गद्यांश में से ढूंढकर लिखिए।
प्र.2	निर्देशानुसार हल कीजिए-
I	दिए गए शब्दों के विलोम शब्द लिखिए- अंत , कमी
II	दिए गए शब्दों के दो-दो पर्यायवाची(समानार्थी) शब्द लिखिए- सखा , पक्षी
III	उपयुक्त सर्वनाम शब्द से वाक्य पूर्ण कीजिए - अ) _____ परिश्रम करेगा, _____ सफल होगा। ब) दाल में _____ काला है।
IV	वचन बदलिए – माता , चुहियाँ
V	लिंग बदलिए- अध्यापक , लुहार
VI	दिए गए शब्दों से भाववाचक संज्ञा बनाइए- बैठना , शिष्ट
VII	दिए गए शब्दों को पढ़िए और संज्ञा के भेद लिखिए- झाँसी , मनुष्यता , सब्ज़ी
VIII	दिए गए वाक्यों में विशेषण शब्दों को रेखांकित कीजिए- अ) धरती गोल है। ब) मुझे दो किलो शक्कर दे दो।
IX	दिए गए अनेक शब्दों के लिए एक शब्द लिखिए- अ) मिट्टी के बर्तन बनाने वाला ब) लोहे के औज़ार बनाने वाला
X	रिक्त स्थान में उपयुक्त कारक भरिए- अ) गंगा हिमालय _____ निकलती है। ब) घोंसले _____ चिड़िया है।
प्र.3	निम्नलिखित प्रश्नों के सही विकल्प चुनिए-
I	मूर्तियाँ किसने बनाई? अ) चर्मकार ने ब) शिल्पकार ने स) कुम्हार ने
II	काबुलीवाले को किसने आवाज़ दी? अ) टीना ने ब) रीना ने स) मिनी ने
III	बरामदे से जुड़ा लंबा-चौड़ा कौन-सा कमरा था? अ) शयनकक्ष ब) रसोईघर स) बैठककक्ष
IV	किसकी पत्नी ने ढाई सौ रुपये माँगे?

	अ) अंग्रेज़ की ब) लाला झाऊलाल की स) बिलवासी मिश्र की
V	बालक कौन-से पेड़ पर बैठने की कल्पना कर रहा है? अ) नीम ब) अमरूद स) कदंब
प्र.4	सही कथन के आगे (✓) का तथा गलत कथन के आगे गलत (x)का निशान लगाइए -
I	माँ बालक के लिए डंडा ला देती।
II	बीरबल अपनी बुद्धिमानी के कारण अकबर के प्रिय थे।
III	इंदिरा ने बचपन में अपने डर की बात सभी को बता दी थी।
IV	यदि घटनास्थल पर बिलवासी जी न आते तो लालाजी को पुलिस पकड़कर ले जाती।
V	काबुलीवाला मिनी को खिलौने देता था।
प्र.5	निम्नलिखित प्रश्नों के उत्तर लिखिए-
I	विकल होकर माँ क्या करतीं?
II	लोटा लाला झाऊलाल को क्यों नापसंद था?
III	बचपन में इंदिरा गांधी को क्या-क्या अच्छा लगता था ?
IV	बीरबल ने तीनों मूर्तियों की क्या-क्या विशेषताएँ बताईं?
V	फूल और काँटे में क्या अंतर है?
प्र.6	मूल्यपरक प्रश्न- प्राचीन काल से ही हिन्दू धर्म में कुछ पेड़ों की पूजा की जाती है। इसके पीछे क्या कारण हो सकता है? अथवा हमें अपने लाभ के लिए भी किसी को हानि क्यों नहीं पहुँचानी चाहिए?
प्र.7	आपके मामाजी ने वाद-विवाद प्रतियोगिता में प्रथम आने पर आपको उपहार में पुस्तकें भेजी है उन्हें धन्यवाद देने के लिए पत्र लिखिए।
प्र.8	“हिन्दी दिवस” विषय पर निबंध लिखिए-




SUBJECT -ENGLISH

Q1.	Read the passage given below-
	Lily was a little girl who loved flowers. She had a small garden in front of her house where she grew many colorful flowers. Every morning, Lily would water her flowers and talk to them. She believed that talking to flowers made them happy and helped them grow. One day, while watering her garden, Lily noticed a tiny seed on the ground. She picked it up and planted it in her garden. Every day, she took special care of the seed, watering it and giving it plenty of sunshine. After a few weeks, the seed grew into a beautiful sunflower. Lily was so excited! The sunflower was tall and bright, and it made her garden look even more beautiful.
	Now answer the following questions-
A	What did Lily love?
B	Where did Lily have her garden?
C	What did Lily find on the ground one day?
D	What did Lily do with the seed?
E	What did the seed grow into?
Q2.	Read the given line below and answer the questions that follows-

	<i>"I do so hope they've really come to stay"</i>
A	Who are "they" in this line?
B	Who is hoping 'they' stay?
C	Where does the poet find them?
D	Name the poem.
Q3.	Choose the correct alternative from the given options-
A	What was the name of the artist? i) The king ii)Herr Grupello iii) Courtiers.
B	Payasam is taken - i) at the start of the Onam feast ii) when it is cooked iii) at the end of the Onam feast.
C	To welcome king Mahabali, Kalyani,s mother- a. danced with joy b. made a floral carpet c went to the water
D	The stoppage was caused by – i) the pendulum ii) the weights iii) a faint tick
E	Aunt Seema had hung a string of mango leaves to – i) dry them ii) welcome the children iii) keep out flies
Q4.	Write down a summary of the poem by filling in the blanks with the correct options.
	As Johnny went to school he would be looking up at the _____ (stars / sky). Everyone called him Johnny _____ (head in air / head down there). One day, he did not see a _____ (dog / cat) that came his way and fell down. One day, when Johnny was walking beside a river watching the _____ (swallows / penguins) in the sky. Before long , Johnny fell into the _____ (river / fish). Two strong men heard his cries and brought him out of the water . Then the fish came up to tease him saying , 'Little Johnny look you have lost your _____ (pen and paper / writing book).
Q5.	Write the meaning of -
	Brink, dismay, swift, evidently, cyclone, anxiously, conduct, fatigue, whisper, stirring, cricket, wee
Q6.	Write answer in one word -
A	At what spot johnny fell into the river?
B	What is the bark of the tree used for?
C	I am a green fruit. I also produce oil. _____
Q7.	Answer the following questions.
A	What happened when a cyclone struck?
B	Why did the Elector laughed heartily?
C	Describe what steps Kalyani's mother followed for making a floral carpet?
D	Where did Ravi and Ratna go for their vacation?
Q8.	Do as directed

A	Indore is the cleanest city.(Encircle proper noun and underline common noun)
B	I _____ cooked food.(Fill in the blank with correct Reflexive Pronoun – herself / myself)
C	I have so _____ (many / much) friends .(Fill the appropriate determiner.)
D	Lata and Geeta are best friends. _____ (He / They) are good dancers too. (Insert correct personal pronoun)
E	Riya ate ____ orange. (Put appropriate articles – A/An / The)
F	I hurried to school. (Rewrite the sentence in negative form)
G	I am fond of <u>singing</u> . (Identify the bold and underlined word -Present participle/ Gerund)
H	She (is / are) a good girl. (Choose the correct verb)
I	He watched a movie last night. (Rewrite the sentence in Past Continuous Form)
J	(beautiful, yellow , ten) roses. (Rearrange the adjectives in proper order and rewrite the sentence)
Q9.	As a student representative of class V , write a letter to the general manager of an ice – cream factory requesting him to allow your class visit the factory. Mention the date, duration, total visitors etc as necessary information.
Q10.	Draw a beautiful picture of your choice and write five sentences on it .

SUBJECT-MATHS

Q.1	a)	Learn the following definitions and their formulae's: - <ul style="list-style-type: none"> ● Perimeter ● Area ● Volume ● Types of triangles
	b)	i) What will be the sum of place value and face value of underlined digit in 3 <u>7</u> 596 ii) What will be the sum of place value and face value of underlined digit in 746 <u>3</u> 00
	c)	Draw line of symmetry for following figures: - i)  ii)  iii)  iv) 8 v) 7
	d)	Change the following Roman numerals into Hindu-Arabic numerals: LXVI ii) XCIX iii) DCVI
Q.2	a)	Find the volume of a cuboid if Length is 25 cm, breadth is 14 cm and height is 2 cm
	b)	Find the HCF of the following numbers: - 14 and 48 ii) 33 and 55
Q.3	a)	Given below are the land areas of four countries of the world. Study the list and answer the following questions: - Algeria = 95,96,960 sq km Belgium = 96,29,091 sq km Germany= 1,70,75,200 sq km Kuwait = 99,84,670 Which country has largest area? Round off the population of Canada to nearest 100's and 1000's Write the area in ascending and descending order.

SUBJECT-SCIENCE

A. Draw the diagrams of-

- a. Structure of a seed b. Life Cycle of a Plant c. Brain d. Structure of an eye

B. Answer the following questions:

1. Define the terms:-

- i. Skeleton ii. Crop iii. Respiration iv. Joint v. First Aid
vi. Balanced diet vii. Nervous System viii. Disease ix. Taste buds x. Nerves

2. Write the differences between –

- a. Rabi Crop and Kharif Crops. b. Communicable and Non-Communicable diseases
c. Ligaments and Tendons d. Voluntary and Involuntary Muscles
e. Sensory nerves and Motor nerves
3. Why do animals move from one place to another?
4. What are deficiency diseases?
5. What are the different parts of brain? Write the function of each.
6. Describe brain.
7. Write the importance of the following:
 a. hair in the nose b. fluid in the skull
8. What are the different modes of transmission of communicable diseases?
9. Write the names of any three deficiency diseases, their causes, symptoms and preventive measures
10. Write the importance of roughage and water.

NOTE:

- Learn all HOTS questions.
- FOR ALL OBJECTIVE TYPES QUESTIONS PLEASE REFER BOOK.

SUBJECT-SOCIAL SCIENCE

Q.1	Fill in the blanks: -
1)	Kayak is the boat used by _____
2)	Downs are the grasslands of _____
3)	_____ and _____ are the important deserts in Asia.
4)	Parallels of latitude are of _____ length.
5)	Missouri provides plenty of _____ in prairies.
6)	Earthquake are caused by _____ inside the Earth.
7)	Sandstorms are very common in _____.
Q.2	State True or False: -
1)	Ranches are found in Saudi Arabia.
2)	Sahara Desert and Kalahari Desert are important desert in Africa.
3)	Badger is a bird found in prairies.
4)	Human activities cause water pollution.
5)	The shaking of Earth's surface is called volcanoes.
6)	Drought results in excessive food production.

7)	Meteorologists is one who study about weather.
Q.3	Unscramble the following with the help of clues: -
1)	ASSCAAV (Food crop)
2)	UUKN (Capital City)
3)	OUIBDES (a primitive tribe)
4)	HHEDNAR (Major airport)
5)	PDLAMTES (Fruits)
Q.4	Answer the following question: -
1)	Which country is called “Land of the Rising sun” and why?
2)	What is Congo Basin?
3)	How the Earth is divided into three heat zones?
4)	Define Latitude and Longitudes.
5)	What do you mean by air pollution?
6)	What are the results of cyclones?
7)	Differentiate between weather and climate?
8)	Write three sentences about Tsunami.
Q.5	Draw a diagram to show important latitudes, along with show the important heat zones.