

Lokmanya Vidya Niketan
Term – I Worksheet 2024-25
Class – III

ENGLISH

Q.1	Read the passage carefully and answer the following questions-
	There was a rumor in the city of Vijaynagar that Ram, an old man who lived on the outskirts of the city has been cursed and if that anyone looked at his face, they will lose their appetite. This rumor reached to king Krishnadevrai and he decided to find the truth.
	Now answer the question-
1.	Who was Ram?
2.	Where did Ram lived?
3.	What was the curse?
4.	What they will lose?
5.	What was the name of the king?
Q.2	Choose the correct answer -
1	Wicked neighbors _____ the dog. a. killed b. beaten c. saved
2.	Opposite of good is- a. excellent b. best c. bad
3.	Aristotle’s school was held a. in a common classroom b. at a large sports ground c. at his home
4.	Oats porridge can be eaten – a. for breakfast b. as a snack c. for dinner
5.	Gokul’s daughter asked him to bring back a – a. pony for her red handkerchief and a toy c. bangles
Q.3	Fill in the blanks -
1.	_____ is the mode of travel talked about in the poem.
2.	Gokul went to _____ to buy presents for his family.
3.	_____ neighbours killed the dog with a spade.
4	Thousands of years ago, there were _____ in India.
5.	Kind deeds are like _____.
Q.4	Write true or false for the following statements-
1.	The black kitten fall asleep in the trunk. ()
2.	The first school started last year. ()
3.	We should not waste water at school. ()
4.	The shopkeeper at the sari store thought Gokul was mad. ()
5.	We should keep weeds out of gardens. ()
Q.5	Do as directed
1.	Write the correct Plural form of the given nouns- hen, bride, boy, tooth
2.	Fill in the blanks with correct pronouns
a.	_____ (She/We) is a dancer.
b.	_____ (I/her) like to sleep.
3.	Write the correct Article (a/an/the) before each noun- _____ ring , _____ planet , _____ umbrella, _____ nail, _____ planet
4.	Change the gender of the given nouns- actor, mother- in- law, peacock, tiger, prince
5.	Fill in the blanks with Possessive pronouns-
a.	The dog belongs to Anil. It is _____.
b.	The park belongs to us. It is _____.
c.	The paintings belongs to Azhar. It is _____

Q.5	Match the given words with their meanings-	
	Column A	Column B
1.	guru	surplus
2.	kind	worry
3.	leftovers	teacher
4.	concern	great
5.	howling	good nature
Q.7	Answer the following questions -	
1.	Where did the camel live?	
2.	What is a gurukul?	
3.	Why did Gokul give his money to the beggar?	
4.	Which subjects were taught in ancient Greece in olden days?	
5.	What was the news Mr. Tabby Gray told her kittens one day?	
Q.8	Write five sentences on "My School".	
Q.9	Write a short paragraph on "Spring season".	
Q.10	Write an essay on "A day on beach".	

HINDI





प्रश्न 1	दिए गए काव्यांश के आधार पर पूछे गए प्रश्नों के सही उत्तर लिखिए -		
	<p>चूहे जैसा रूप है पाया, कोमल-कोमल जिसकी काया। लंबी पूँछ में रहते बाल, देखो देखो इसकी चाल। भागे सरपट भरी दुपहरी, पीठ पर धारी भूरी-भूरी। फल और बीज हैं इसका खाना, कभी न बच्चो इसे सताना।</p>		
i.	लंबी पूँछ में क्या रहते हैं? अ) जाल	ब) बाल	स) खाल
ii.	पीठ पर कैसी धारी है? अ) काली	ब) हरी	स) भूरी
iii.	कोमल-कोमल किसे कहा गया है? अ) साया	ब) काया	स) माया
iv.	इसका खाना क्या है? अ) गन्ना	ब) दूध	स) फल और बीज
v.	ये पंक्तियाँ किस जानवर के बारे में हैं? अ) गाय	ब) बिल्ली	स) गिलहरी
प्रश्न 2	निम्नलिखित प्रश्नों के सही विकल्प चुनिए -		
i.	आओ हम सब ----- लगाएँ। अ) वृक्ष	ब) गाजर	स) गन्ना
ii.	काँपी के पृष्ठ कैसे थे ? अ) गंदे	ब) साफ-सुथरे	स) रंगीन
iii.	गुरमीत को क्या खाना पसंद नहीं था ? अ) खीर	ब) सब्जियाँ	स) चॉकलेट
iv.	बीरबल तुम सच में क्या हो ? अ) मूर्ख	ब) नादान	स) अद्वितीय
v.	पापा ने किसे गोदी में उठाया ? अ) झिलमिल को	ब) रिमझिम को	स) चुनमुन को
प्रश्न 3	रिक्त स्थानों की पूर्ति कीजिए।		
	(स्वादिष्ट , प्रश्न-पत्र , मुस्काएँ , चॉकलेट , माफ)		
i.	वृक्ष हँसे , ----- , गाएँ।		

ii.	वंदना जी ने सबको ----- दिया।
iii.	मेडम मुझे ----- कर दो।
iv.	पापा के हाथ में ----- का रंगीन डिब्बा था।
v.	गाजर का हलवा इतना ----- होता है।
प्रश्न 4	सही कथन पर सही का(✓) तथा गलत (✗) कथन पर गलत का निशान लगाइए –
i.	बातों-बातों में अच्छे लोगों की बात निकली।
ii.	अमेरिका के निवासी स्वादिष्ट पेय काकाओ से बनाते थे।
iii.	किताबों का बिगड़ा हाल देखकर उसकी माँ अध्यापिका से मिली।
iv.	अनेक शब्दों की पहचान कराने वाले शब्द लिंग कहलाते हैं।
v.	हाथी का नाम अप्पू था।
प्रश्न 5	सही पर्यायवाची शब्द चुनिए –
i	चाँद – औरत चन्द्रमा नारी
ii	बारिश – जलज पंकज बरसात
iii	धरती – मित्र पानी भूमि
iv	फूल – पुष्प सुत रवि
v	जल – नदी नीर वर्षा
प्रश्न 6	निर्देशानुसार हल कीजिए –
i.	दिए गए वाक्यों में से सर्वनाम शब्दों को छाँटकर पुनः लिखिए – अ) मैं अमन के घर गया। ब) तुम्हें बोलना चाहिए। स) वह मुझसे नाराज है।
ii.	रेखांकित शब्दों के वचन बदलकर वाक्य लिखिए – अ) मोमबत्ती जला दो। ब) अपनी पढ़ाई करो। स) मैंने जलेबी बनाई।
iii.	दिए गए शब्दों के लिंग बदलकर लिखो – बेटा, दादी, चींटी, चाचा
iv.	दिए गए वाक्यों में से संज्ञा शब्द पहचान कर सामने लिखिए – अ) वह बैंक जा रहा है। ब) तुम पलंग पर बैठ जाओ। स) मैं बगीचे में जा रही हूँ।
v.	विसर्ग (:), अनुस्वार (ँ) व अनुनासिक (ँ) वाले दो-दो शब्द लिखो।
प्रश्न 7	निम्नलिखित प्रश्नों के उत्तर एक शब्द में लिखिए –
i.	लिखने की विधि को क्या कहते हैं ?
ii.	सही क्रम से लिखे अर्थ वाले शब्द समूह को क्या कहते हैं ?
iii.	वचन के कितने भेद होते हैं ?
iv.	वर्णों के क्रम से लिखे समूह को क्या कहते हैं ?
v.	संज्ञा के स्थान पर काम आने वाले शब्द क्या कहलाते हैं ?
vi.	स्त्री जाति की पहचान करने वाले शब्दों को क्या कहते हैं ?
vii.	समान अर्थ बताने वाले शब्द क्या कहलाते हैं ?
प्रश्न 8	निम्नलिखित प्रश्नों के उत्तर लिखिए –
i.	मोहक आँखों में आँसू भरकर उदास क्यों बैठा था ?
ii.	बिना वृक्ष के जीवन सपना क्यों है ?
iii.	मम्मी-पापा को गुरमीत की बात पर विश्वास क्यों नहीं हुआ ?
iv.	अकबर क्या देखकर मोहित हो गए ?
v.	बाँके ने जल्दी उठकर क्या करने को कहा ?
प्रश्न 9	अनुच्छेद लिखिए – रक्षाबंधन मेरे जन्मदिन का उपहार

प्रश्न 10 चित्र वर्णन कीजिए (कोई पाँच वाक्य)



MATHEMATICS

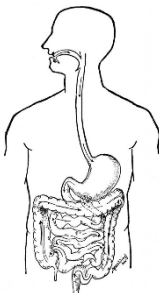
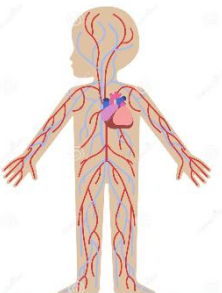

Q.1	Choose the correct option.
A	If quotient = 5, divisor = 5 and remainder = 3 then the dividend is (i) 5 (ii) 28 (iii) 25 (iv) 3
B	$65 \div 65 = \underline{\quad}$ (i) 0 (ii) 1 (iii) 65 (iv) none of these
C	If we divide the smallest 5-digit number by smallest 2-digit number, the quotient will be. (i) 10 (ii) 100 (iii) 1 (iv) 99
D	I am a solid who has 2 edges. Who am I? (i) Cylinder (ii) Cube (iii) Cone (iv) Cuboid
E	What number must be multiplied by 95 to get the product as 950? (i) 10 (ii) 100 (iii) 1000 (iv) 10000
G	Multiplication can be defined as repeated _____ (i) Addition (ii) Divisor (iii) Multiplication (iv) Subtraction
I	The successor of 3524 is _____ (i) 3255 (ii) 3525 (iii) 3432 (iv) 6543
J	Find the open figure from the given picture. (i)  (ii)  (iii)  (iv) 
K	The answer you will get after multiplication is called _____. (i) Product (ii) Sum (iii) Subtraction (iv) Division
L	$5 \times 9 = \underline{\quad}$, then $\underline{\quad} \div 5 = 9$ (i) 5,9 (ii) 45,9 (iii) 45,45 (iv) 45,5
Q.2	Fill in the blanks.
A	$5 \times 12 \square 20 \times 3$ (using <, > and = sign)
B	$200 \div \underline{\quad} = 2$
C	$35 \div 0 = \underline{\quad}$
D	$8975 - \underline{\quad} = 8974$
E	Division can be defined as repeated _____
Q.3	Write the name of the solids and there number of edges, faces and vertices.

		Name of Solid	Edges	Faces	Vertices
	i.				
	ii.				
	iii.				
	iv.				

Q.4	Simplify.
A.	Add 5500 to the difference of 7000 and 2500.
B.	Subtract 3500 from the sum of 4500 and 1500.
C.	Estimate the difference of the following numbers by rounding off the number to the nearest hundreds. Also, find the actual difference. (i) 5436 and 2554 (ii) 4534 and 2654 (iii) 3745 and 1232
D.	Solve the given division statements and write the corresponding multiplication statement. (i) $50 \div 3 = \square$, Multiplication statement - \square (ii) $77 \div 7 = \square$, Multiplication statement - \square (iii) $42 \div 2 = \square$, Multiplication statement - \square
E.	Write the following numbers in ascending order. (i) 6455, 6432, 6574, 6534 (ii) 2343, 2341, 2347, 3241 (iii) 8676, 8760, 8675, 8645
F.	Write the following numbers in descending order. (i) 4352, 4532, 4357, 4523 (ii) 6754, 6785, 6745, 6875 (iii) 1243, 1543, 1265, 1275
G.	A shopkeeper sold 1325 toys in one year and 4534 toys in the next year. How many toys did he sell in two years?
H.	A fruit vendor sold total 7685 boxes of mangoes and apples in one week. If out of these 3634 boxes were for mangoes then how many boxes of apples were there?
I.	Divide the following and check your answer. (i) $45 \div 3$ (ii) $53 \div 4$ (iii) $65 \div 5$ (iv) $87 \div 2$
J.	Write in columns and find the product. (i) 175×12 (ii) 234×30 (iii) 123×6 (iv) 453×31
K.	The cost of one story book is ₹ 110. What will be the cost of 25 such story book?
L.	A mother distributed ₹ 750 equally among her 5 children. How much money did each child get?

SCIENCE

Q.1	Choose the correct options:
i.	Which of the following is incorrect ? a. Living things can move b. Living things grow c. Living things do not breathe d. Living things breathe
ii.	Animals move from place to place in search of _____ a. Friends b. Rocks. c. Toys. d. Food
iii.	Meena was riding a herbivorous animal. Identify the animal.

		a. Tiger	b. Horse	c. Rabbit	d. Deer
	iv.	Raju brought some roots from the market to eat. Which roots did he brought ?			
		a. Mango	b. Radish	c. Tomato	d. Cabbage
Q.2		Fill in the blanks:			
	i.	_____ is a bird which has broad and flat beak.			
	ii.	A bird flies with_____ and_____ movement.			
	iii.	_____ is the building block of our body.			
	iv.	The skeletal system is made up of_____			
	v.	_____ is an example of man-made thing.			
	vi.	Meena saw an animal in the forest who ate both plants and the flesh of other animals. The animal was_____			
	vii.	_____ is called the kitchen of the plant.			
	viii.	_____ absorbs water and minerals from the soil.			
	ix.	Raju saw a bird flying in the sky with large talons. The bird was_____			
	x.	Digestion starts in our_____			
Q.3		Match the column:			
	i.	Flyover	a. Herbivore		
	ii.	Mountain	b. Skeletal system		
	iii.	Hippopotamus	c. Non-living thing		
	iv.	Shark	d. Man-made thing		
	v.	Heart	e. Carnivore		
	vi.	Skull	f. Circulatory		
Q.4		State whether True or False:			
	i.	Nerves carry messages to the brain.			
	ii.	Lungs are a part of muscular system.			
	iii.	Food chain always begins with animals.			
	iv.	Cabbage is an example of food stored in stem.			
	v.	Banana plant has woody stem.			
Q.5		Identify and name the organ systems.			
					
		a.	b.	c.	
Q.6		Answer in one word:			
	i.	While walking in the garden, Seema saw some plants with beautiful green leaves. But some leaves were yellow. Which pigment was missing from them ?			
	ii.	In her village, Rama saw a bird sewing the leaves to make its nest. She wants to know the name of the bird. Can you help her ?			
	iii.	Seema was playing with her toys. She suddenly touched a sharp pin and pulled back her hand. Which organ system helped her ?			
	iv.	Which part of the plant holds it strongly to the soil ?			
	v.	Name a flightless bird.			
Q.7		Observe the pictures of nests write the names of the birds who build them.			

	iii.	Vesthi	c) Andaman and Nicobar
	iv.	Monsoon	d) sunflower
	v.	Assam	e) a head wear
	vi.	Rice	f) Dispur
	vii.	Turban	g) rainy season
	viii.	Oil	h) oil
	ix.	Dhoti	i) seven
	x.	Soyabean	j) Bhopal
	xi.	Vesthi	k) oil
	xii.	MadhyaPradesh	l) kurta
	xiii.	Continents	m) a kind of lungi
	xiv.	Desert	n) Kerala
Q.5		Answer in one word.	
	i.	Which Vegetable we eat raw?	
	ii.	Write the full form of NCR.	
	iii.	Which word means “The home of snow”.	
	iv.	How many planets are there?	
	v.	What is the capital of Rajasthan?	
	vi.	Write any two festivals celebrated in Autumn.	
	vii.	The large piece of water is called?	
	viii.	Name any one continent.	
	ix.	Name any three spices .	
	x.	How many Islands groups of India.	
	xi.	Man of West Bengal wears_____	
	xii.	What is the main food of the people living in North India?	
	xiii.	Write any four milk products .	
	xiv.	Name any one river that flow into the Arabian sea.	
	xv.	What is the full form of NCR.	
Q.6		Very short questions:	

	i.	Name any two pulses.
	ii.	Write two lines on Spring season.
	iii.	Which type of dresses of Kashmiri men and women wear ?
	iv.	Name any two festivals in Winter season.
	v.	Describe the location of India in Asia.
	vi.	The low area between two mountains or hills is called ?
	vii.	How many island groups in India name them?
	viii.	Write the name of any three cereals .
	ix.	How many types of movements are there name them?
	x.	Name any one Union territory.
	xi.	Define Tarai .
	xii.	Write the name of any two continents .
	xiii.	Name one winter festival.
	xiv.	What is the shape of the Earth .
Q.7		Short type questions:
	i.	Which food grains are mainly grown in India?
	ii.	Write the neighbouring country of India
	iii.	Which food grains are mainly grown in India?
	iv.	How are days and night are formed?
	v.	What is the difference between weather and climate?
Q.8		Long type questions:
	i.	Write the Union Territories of India along with their capital.
	ii.	What is the role of Central government and State Government?
	iii.	What is Constellation? Name any two.
	iv.	How many Planets are there in the solar system? Name them.
	v.	How does weather affect ourselves?
	vi.	Name any four union territories of India along with their capital.
	vii.	List some Indian clothes that are popular all over the world.
	viii.	Describe some common dresses of man and women in India?

Q.9		Guess who am I?
	i.	I cause seasons_____.
	ii.	I am desert of Rajasthan .
	iii.	I am surrounded by water from all sides____.
	iv.	I am king of fruits.
	v.	I am surrounded by water from all sides.
	vi.	I am famous sweet dish in west Bengal.
	vii.	I add taste in a food.
	viii.	I am a desert of Rajasthan.
	ix.	I am surrounded by water from three sides____.
	x.	I am very useful river in the Northern plains.
	xi.	I am famous sweet dish of west Bengal.
Q 11		Locate neighbouring countries, states and capital of India on the map.
Q. 12		Draw (Landforms, Cereals, Pulses, Fruit, vegetables)
