

# Term – I Worksheet 2024-25

## Class – II

### ENGLISH

Q1.	Read the following passage and answer the following:-
	I have a hen.It is my pet.My pet is white.
	I like to play with it.It is a nice pet.
	Answer the following question
1	What is your pet?
2	What is the colour of your pet?
3	Do you like to play with it?
4	Do you have a pet?
5	Name any one pet other then hen?
Q2	Read and answer the following:-
	Tim is sad.Tim wants to go to zoo.
	He wants to see a lion.Don't be sad Tim.
1	Why is Tim sad
	. He wants to go to park.
	. He wants to go to school.
	. He wants to go to zoo.
2	Which animal you like to see in zoo.
	. Lion
	. Camel
	. Elephant
1	Tim wants to see a _____
2	Do you like to go to zoo _____
3	Do your city has a zoo Yes/No

Q.3	Write the meaning of the following
1	pupils
2	inspetion
3	serve
4	gulp
5	sapling
6	fast
Q4.	Write the pronoun for the following.(It,They,Its,We,He)
1	Tina and Mina
2	Animals
3	Mohan
4	I,My Uncle and My Mother
5	Table
Q.5	Write True and False -
1	Rohan's mother now makes roll like aunt Jaya.
2	A dear little plant lay fast a sleep.
3	A group of monkeys decided to eat too much.
4	Reena and Benoy lived in a large house.
5.	Head monkey ate big bite.
Q.6	Answer the following-
1.	Who makes food for you?
2.	Do you like sweet?
3.	Who makes spicy food for you?
4.	How often do you eat it?
5.	Is it healthy food?

6.	What is your favourite food?
Q.7.	Write opposites of the following-
	Day Go Large Black
Q.8	Do as directed
a.	Make sentences
	Bag
	He
	Book
	Pet
b.	Write plural or singular for the following.
	i.cat                  ii tables                  iii pen                  iv dresses
C.	Write any 4 action words
Q.8	Fill in the blanks -(we,it,he,my,I)
	_____ am a student.
	This is Virat Kohli. _____ is a cricketer.
	Mother bought a book for _____ brother.
	_____ is a bottle.
	_____ bring bags.
Q.9	Answer the following-
1.	Where is Leena going?

2.	What did the school inspector ask the class?
3	Why did the birds love Neem tree?
4.	What did aunt Jaya make very well?
5.	What did the tiny monkey tell the others?

## HINDI

नाम -----

प्रश्न 1		निम्नलिखित वाक्यों पर सही उत्तर चुनकर सही का (✓) निशान लगाओ।
	1	रोहन किसकी वर्दी पहन कर आया था ? (सिपाही , डॉक्टर )
	2	बबली कैसी लड़की थी ? (बहादुर , डरपोक )
	3	मिट्टी के बर्तन बनाता है । ( मोची , कुम्हार )
	4	बबली के माता-पिता कैसे थे ? ( लालची , निर्धन )
	5	हलवाई बना रहा था । ( लड्डू , बेसन चक्की )
	6	स्वाति क्या बनाकर आई थी ? (अध्यापिका , परी )
	7	डाकिया बाँटता है । ( पत्र , समाचार पत्र )
	8	कुम्हार किसके बर्तन बनाता है। ( चांदी के , मिट्टी के )

	9	पेड़ पर ----- बैठी हैं । ( चिड़िया , चिड़ियाँ )
	10	किस शैतानी की बात की गई है ? (मटका फोड़ने की ,बादल फोड़नेकी
प्रश्न 2		निम्नलिखित शब्दों के बहुवचन लिखिए।
		केला -----चूहा -----गुड़िया -----लड़की -----
प्रश्न 3		निम्नलिखित वाक्यांशों के लिए एक शब्द लिखिए ।
	1	जो कक्षा में पढ़ाती हैं -----
	2	जो मिट्टी के बर्तन बनाता है -----
	3	जो जूते चप्पल सिलता है -----
	4	जो सोने चांदी के गहने बनाता है -----
प्रश्न 4		निम्नलिखित वाक्यों को विलोम शब्द से पूर्ण करिए।
	1	हमें अपने घर को साफ रखना चाहिए उसे ----- नहीं करना चाहिए।
	2	हमें अमीर और -----का भेद नहीं करना चाहिए।
	3	हमें अच्छे और ----- की परख होनी चाहिए।
	4	अमन वीर बालक है पर चमन ----- है।
प्रश्न 5		निम्नलिखित शब्दों के बहुवचन लिखिए।
		नदी ----- गुड़िया ----- चिड़िया ----- लड़की -----
प्रश्न 6		निम्नलिखित वाक्यों में पुल्लिंग शब्दों के स्त्रीलिंग शब्द लिखिए।
	1	मेरे पिता अध्यापक है और माता ----- है।
	2	बगीचे में माली और ----- काम कर रहे हैं।
	3	जंगल में हिरन और -----दौड़ रहे हैं ।

	4	कुम्हार और ----- मिट्टी के बर्तन बना रहे हैं।
	5	बकरा और ----- घास खा रहे हैं।
प्रश्न 7		नाम शब्दों की जगह आने वाले निम्नलिखित शब्दों का प्रयोग करके सरल वाक्य बनाइए।
	1	आप -----
	2	तुम -----
	3	हमारा -----
	4	तुम्हें -----
	5	वे -----
प्रश्न 8		अपने मित्र या सहेली के बारे में पाँच वाक्य लिखिए।
		-----
		-----
		-----
		-----
		-----
प्रश्न 9		" बादल बरसे " कविता की करर पंक्तियां को सुंदर अक्षरों में लिखकर
		बादल का चित्र बनाइए।
		-----
		-----
		-----
		-----



<b>Q.2</b>		<b>Fill in the blanks.</b>																																								
	a	If _____ is added to a number ,then the sum is the number itself.																																								
	b	$65 + 94 = \text{_____} + 94$																																								
	c	A birthday cap is looks like a _____.																																								
	d	$59 - 29$ is equal to _____.																																								
	e	$8 \times 7 = \text{_____}$																																								
<b>Q.3</b>		<b>Write true and false.</b>																																								
	a	236 is an odd number. _____																																								
	b	Cylinder is plane 2-D shape. _____																																								
	c	100 is the smallest 3- digit number. _____																																								
	d	After every odd number there is an even number. _____																																								
	e	In the number 497, the place value of 7 is 70. _____																																								
<b>Q. 4</b>		<b>Match the following.</b>																																								
		<table style="width: 100%; border: none;"> <tbody> <tr> <td style="width: 50%;">A. <math>74 - 44</math></td> <td style="width: 50%;">a. 72</td> </tr> <tr> <td>B. <math>65 + 7</math></td> <td>b. 81</td> </tr> <tr> <td>C. <math>12 \times 5</math></td> <td>c. 30</td> </tr> <tr> <td>D. <math>24 + 24</math></td> <td>d. 60</td> </tr> <tr> <td>E. <math>9 \times 9</math></td> <td>e. 48</td> </tr> </tbody> </table>	A. $74 - 44$	a. 72	B. $65 + 7$	b. 81	C. $12 \times 5$	c. 30	D. $24 + 24$	d. 60	E. $9 \times 9$	e. 48																														
A. $74 - 44$	a. 72																																									
B. $65 + 7$	b. 81																																									
C. $12 \times 5$	c. 30																																									
D. $24 + 24$	d. 60																																									
E. $9 \times 9$	e. 48																																									
<b>Q.5</b>		<b>Arrange the number in columns and add.</b>																																								
		<table style="width: 100%; border: none;"> <tbody> <tr> <td style="width: 50%; text-align: center;">a. <math>234 + 714</math></td> <td style="width: 50%; text-align: center;">b. <math>412 + 692</math></td> </tr> <tr> <td style="text-align: center;"> <table border="1" style="margin: auto;"> <thead> <tr><th>H</th><th>T</th><th>O</th></tr> </thead> <tbody> <tr><td> </td><td> </td><td> </td></tr> <tr><td> </td><td> </td><td> </td></tr> <tr><td> </td><td> </td><td> </td></tr> <tr><td> </td><td> </td><td> </td></tr> <tr><td> </td><td> </td><td> </td></tr> </tbody> </table> </td> <td style="text-align: center;"> <table border="1" style="margin: auto;"> <thead> <tr><th>H</th><th>T</th><th>O</th></tr> </thead> <tbody> <tr><td> </td><td> </td><td> </td></tr> <tr><td> </td><td> </td><td> </td></tr> <tr><td> </td><td> </td><td> </td></tr> <tr><td> </td><td> </td><td> </td></tr> <tr><td> </td><td> </td><td> </td></tr> </tbody> </table> </td> </tr> </tbody> </table>	a. $234 + 714$	b. $412 + 692$	<table border="1" style="margin: auto;"> <thead> <tr><th>H</th><th>T</th><th>O</th></tr> </thead> <tbody> <tr><td> </td><td> </td><td> </td></tr> <tr><td> </td><td> </td><td> </td></tr> <tr><td> </td><td> </td><td> </td></tr> <tr><td> </td><td> </td><td> </td></tr> <tr><td> </td><td> </td><td> </td></tr> </tbody> </table>	H	T	O																<table border="1" style="margin: auto;"> <thead> <tr><th>H</th><th>T</th><th>O</th></tr> </thead> <tbody> <tr><td> </td><td> </td><td> </td></tr> <tr><td> </td><td> </td><td> </td></tr> <tr><td> </td><td> </td><td> </td></tr> <tr><td> </td><td> </td><td> </td></tr> <tr><td> </td><td> </td><td> </td></tr> </tbody> </table>	H	T	O															
a. $234 + 714$	b. $412 + 692$																																									
<table border="1" style="margin: auto;"> <thead> <tr><th>H</th><th>T</th><th>O</th></tr> </thead> <tbody> <tr><td> </td><td> </td><td> </td></tr> <tr><td> </td><td> </td><td> </td></tr> <tr><td> </td><td> </td><td> </td></tr> <tr><td> </td><td> </td><td> </td></tr> <tr><td> </td><td> </td><td> </td></tr> </tbody> </table>	H	T	O																<table border="1" style="margin: auto;"> <thead> <tr><th>H</th><th>T</th><th>O</th></tr> </thead> <tbody> <tr><td> </td><td> </td><td> </td></tr> <tr><td> </td><td> </td><td> </td></tr> <tr><td> </td><td> </td><td> </td></tr> <tr><td> </td><td> </td><td> </td></tr> <tr><td> </td><td> </td><td> </td></tr> </tbody> </table>	H	T	O																				
H	T	O																																								
H	T	O																																								
<b>Q.6</b>		<b>Arrange the number in columns and subtract.</b>																																								



a.  $898 - 517$

b.  $607 - 238$

H	T	O

H	T	O

**Q.7**

**Find the product.**

a.

b.

H	T	O
3	2	3
	x	3

H	T	O
1	5	6
	x	7

**Q.8**

**Write the definition.**

a.

Circle - \_\_\_\_\_  
 \_\_\_\_\_

b.

Rectangle - \_\_\_\_\_  
 \_\_\_\_\_

**Q.9**

**Solve the following.**

a.  $25 + 7$

$- 17$

b.  $124 + 561 - 341$


T	O

		<table border="1" style="margin: auto;"> <tr><td> </td><td> </td></tr> </table>			<table border="1" style="margin: auto;"> <tr><td>H</td><td>T</td><td>O</td></tr> <tr><td> </td><td> </td><td> </td></tr> <tr><td> </td><td> </td><td> </td></tr> <tr><td> </td><td> </td><td> </td></tr> <tr><td> </td><td> </td><td> </td></tr> </table>	H	T	O																								
H	T	O																														
		<p><b>Step -1</b></p>	<p><b>Step -1</b></p>																													
		<table border="1" style="margin: auto;"> <tr><td>T</td><td>O</td></tr> <tr><td> </td><td> </td></tr> <tr><td> </td><td> </td></tr> <tr><td> </td><td> </td></tr> <tr><td> </td><td> </td></tr> </table>	T	O									<table border="1" style="margin: auto;"> <tr><td>H</td><td>T</td><td>O</td></tr> <tr><td> </td><td> </td><td> </td></tr> <tr><td> </td><td> </td><td> </td></tr> <tr><td> </td><td> </td><td> </td></tr> <tr><td> </td><td> </td><td> </td></tr> <tr><td> </td><td> </td><td> </td></tr> </table>	H	T	O																
T	O																															
H	T	O																														
		<p><b>Step -2</b></p>	<p><b>Step -2</b></p>																													

<b>Q.10</b>		<b>Word problems.</b>
-------------	--	-----------------------

		<p>There are 67 men and 38 women in a hall. How many people are there in the hall?</p>										
a.		<table border="1" style="margin: auto;"> <tr><td>T</td><td>O</td></tr> <tr><td> </td><td> </td></tr> <tr><td> </td><td> </td></tr> <tr><td> </td><td> </td></tr> <tr><td> </td><td> </td></tr> </table>	T	O								
T	O											














	b.	<p>A packet of chocolates has 675 chocolates. If 229 of them were spoiled, then how many good chocolates are there in the packet?</p>
--	----	---

			H	T	O	
<b>Q.11</b>		Observe the letters given below. Then , read the following statement and state true or false.				
						
	a	There is no curved line. _____				
	b	There are only 3 horizontal lines. _____				
	c	These letters are only made up of straight lines. _____				
	d	There are 8 vertical lines. _____				

**EVS**

<b>Q.1</b>		<b>Choose the correct option.</b>
	<b>A</b>	Teacher's day is celebrated on _____. (i) 14 <sup>th</sup> November                      (ii) 5 <sup>th</sup> September                      (iii) 15 <sup>th</sup> August
	<b>B</b>	We can taste the ice-cream with our _____. (i) Tongue                      (ii) Skin                      (iii) Nose
	<b>C</b>	Which of these is a protective food? (i) Pulses                      (ii) Bread                      (iii) Fruits
	<b>D</b>	A person who takes care of our health. (i) Doctor                      (ii) Engineer                      (iii) Teacher
	<b>E</b>	A house which is made up of mud are called _____. (i) Apartment                      (ii) Bungalow                      (iii) Hut
	<b>F</b>	What should we do to keep our teeth clean? (i) brush them once a day      (ii) brush them twice a day      (iii) doing nothing
	<b>G</b>	What we wear to protect ourselves from winter?



D				
E				
F				
Q.6	<b>Identify the picture and write their names in the blank spaces given.</b>			
A		B 		
C		D 		
Q.7	<b>Answer in one words.</b>			
A	Independence Day is celebrated on _____			
B	Higher secondary section includes classes. _____			
C	A person who draws a plan of the house _____			
D	Silk is obtained from _____			
E	A person who teaches us in school. _____			
F	Name of animal from which we get wool. _____			
Q.8	<b>Answer the following question.</b>			
A	Why kuccha house is mostly made in village?			
Ans.	_____			

	<b>B</b>	Write the names of any three people who entertain us.
	<b>Ans.</b>	_____ _____
	<b>C</b>	Why do we need to take proper sleep?
	<b>Ans.</b>	_____ _____
	<b>D</b>	Write the names of the places where people go for worship.
	<b>Ans.</b>	_____ _____
	<b>E</b>	Write any two eating habits to stay healthy.
	<b>Ans.</b>	_____ _____
	<b>F</b>	Write the name of the animals from which we get wool.
	<b>Ans.</b>	_____ _____
	<b>G</b>	Higher secondary section consists of which classes?
	<b>Ans.</b>	_____ _____
	<b>H</b>	How is police helpful to us?
	<b>Ans.</b>	_____ _____
	<b>I</b>	What are recreational places?
	<b>Ans.</b>	_____ _____

### COMPUTER

<b>Q.1</b>	Computer is a machine that runs on _____?
<b>Ans</b>	
<b>Q.2</b>	_____ is the standard output device of the desktop computer.

Ans	
<b>Q.3</b>	Name any two types of computer?
Ans	
<b>Q.4</b>	Which part of the computer is called the brain of a computer?
Ans	
<b>Q.5</b>	_____ is also called a pointing device.
Ans	
<b>Q.6</b>	Write the names of any two places where computers are used.
Ans	
<b>Q.7</b>	What does IPO cycle stands for?
Ans	
<b>Q.8</b>	Click on _____ option to close the paint file.
Ans	
<b>Q.9</b>	Name two devices used to listen music.
Ans	
<b>Q.10</b>	Which of the following device is used to listen music?
Ans	
<b>Q.11</b>	How many tabs does the paint program have? Name them
Ans	
<b>Q.12</b>	Which of the following devices can be used to store information?
Ans	
<b>Q.14</b>	Full form of CPU ?
Ans	
<b>Q.15</b>	A laptop is portable device / immovable device ?
Ans	
<b>Q.16</b>	Full form of IPO ?

Ans	
<b>Q.17</b>	What are the main parts of computer ?
Ans	
<b>Q.18</b>	How many keys in a standard keyboard?
Ans	
<b>Q.19</b>	What is computer ?
Ans	
<b>Q.20</b>	Give me one example of IPO cycle?
Ans	
<b>Q.21</b>	Name two input devices ?
Ans	
<b>Q.22</b>	Name two output devices ?
Ans	
<b>Q.23</b>	Name two storage devices ?
Ans	
<b>Q.24</b>	How many keys on a standard keyboard?
Ans	
<b>Q.25</b>	Which key is used to start a new line?
Ans	